


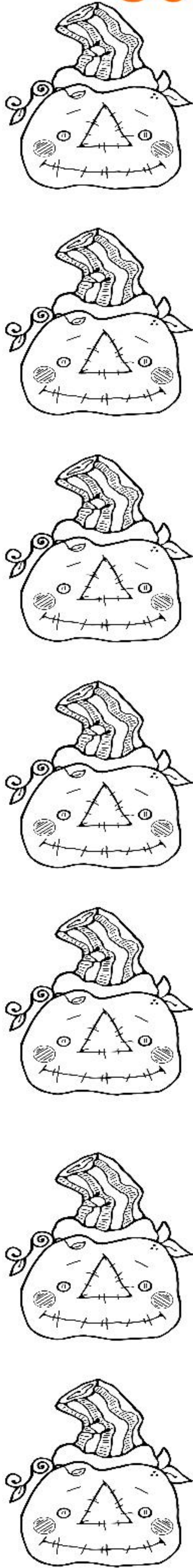
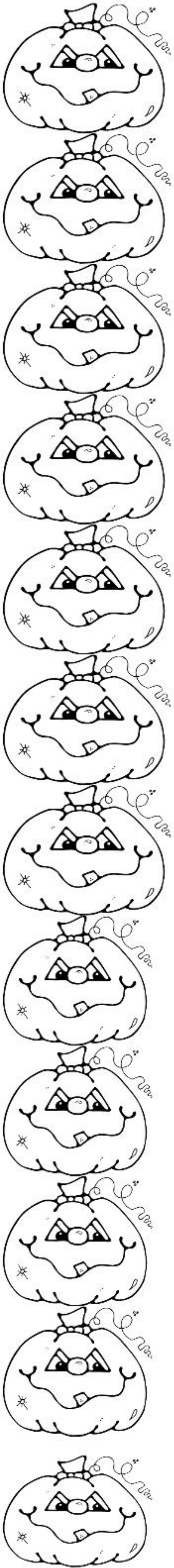
Count the Pumpkins Math

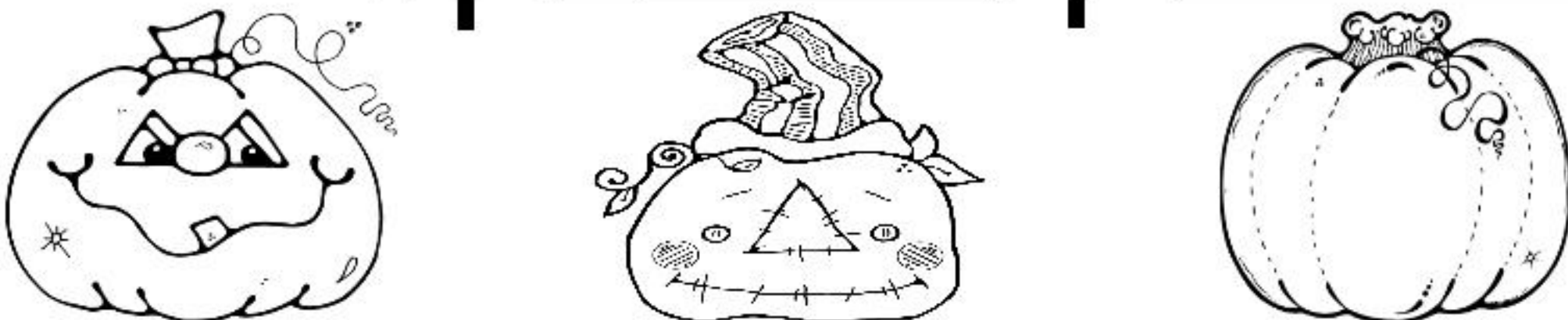


— + — + — = —



Count the Pumpkins Math



$$\underline{\hspace{2cm}} + \underline{\hspace{2cm}} + \underline{\hspace{2cm}} = \underline{\hspace{2cm}}$$


How Many Pumpkins?

Pumpkin Math Instructions:

1. Color the same Pumpkin picture the same color.
2. Write down the amount of pumpkins for each picture.
3. Add the pumpkins.
4. To verify your count, add the pumpkins on page 2.
5. Good Luck!

Answer:

$$\overline{12} + \overline{7} + \overline{8} = \overline{27}$$

